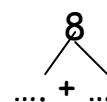
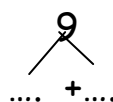
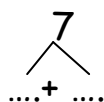
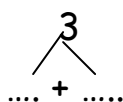
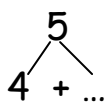
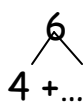
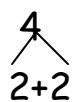


Μαθηματικά

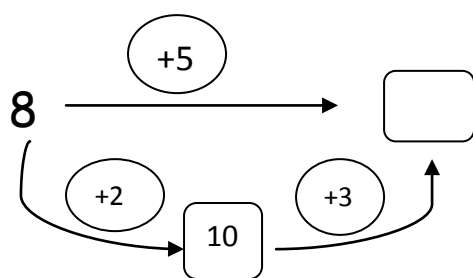
Όνομα :

1. Χώρισε τους αριθμούς σε αθροίσματα:

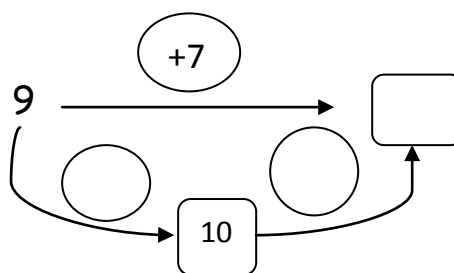


2. Υπολόγισε και συμπλήρωσε τους αριθμούς που λείπουν:

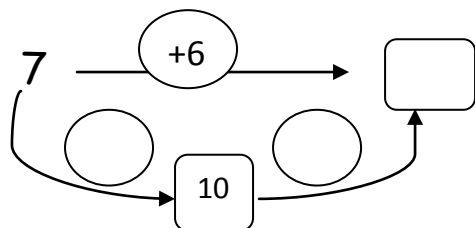
$8 + 5 = \square$



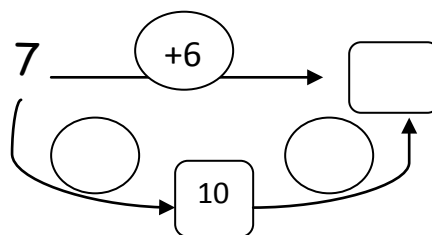
$9 + 7 = \square$



$7 + 6 = \square$



$7 + 7 = \square$



3. Πόσο κάνει;

$8+2+4=$

$5+5+8=$

$9+1+6=$

$7+2+9=$

$6+4+9=$

$9+5=$

$9+7=$

$6+5=$

$8+7=$

$8+5=$

$9+3=$

$7+7=$

$8+8=$

$9+2=$

$9+9=$

$5+7=$

$8+6=$

$6+6=$

$5+8=$

$9+4=$